

NAME _____

DATE _____

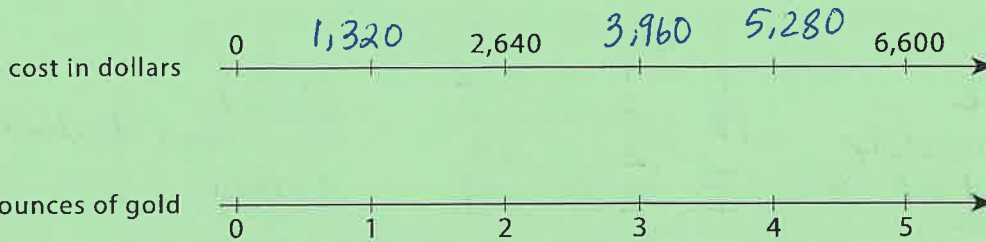
PERIOD _____

Unit 2, Lesson 8

Practice Problems

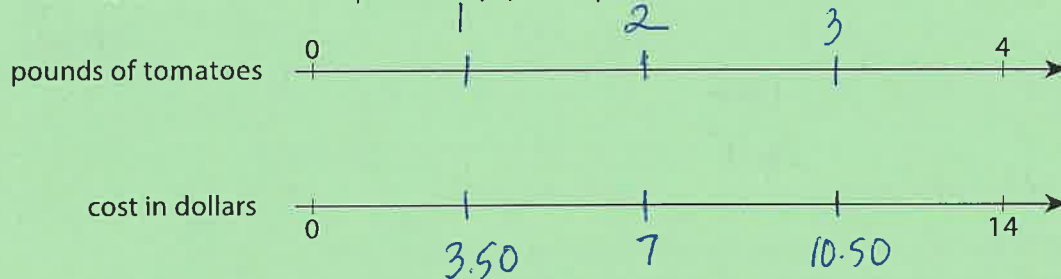
11

1. In 2016, the cost of 2 ounces of pure gold was \$2,640. Complete the double number line to show the cost for 1, 3, and 4 ounces of gold.



1

2. The double number line shows that 4 pounds of tomatoes cost \$14. Draw tick marks and write labels to show the prices of 1, 2, and 3 pounds of tomatoes.



1/2

3. 4 movie tickets cost \$48. At this rate, what is the cost of:

- a. 5 movie tickets? \$60
 b. 11 movie tickets? \$132

$\$48$ Tickets
 $\div 4$
 $\$12$
 $\times 5$ ($\$60$)
 $\times 11$ ($\$132$)

$\$48$ Tickets
 $\div 4$
 $\$12$
 $\times 5$ ($\$60$)
 $\times 11$ ($\$132$)

1/2

4. Priya bought these items at the grocery store. Find each unit price.

- a. 12 eggs for \$3. How much is the cost per egg? per $\frac{\$3}{12} = .25$ per egg
- b. 3 pounds of peanuts for \$7.50. How much is the cost per pound? per $\frac{\$7.50}{3} = 2.50$ per pound
- c. 4 rolls of toilet paper for \$2. How much is the cost per roll? per $\frac{\$2}{4} = .50$ per roll
- d. 10 apples for \$3.50. How much is the cost per apple? $\frac{\$3.50}{10} = .35$ per apple

4



NAME _____

DATE _____

PERIOD _____

5. Clare made a smoothie with 1 cup of yogurt, 3 tablespoons of peanut butter, 2 teaspoons of chocolate syrup, and 2 cups of crushed ice.
- a. Kiran tried to double this recipe. He used 2 cups of yogurt, 6 tablespoons of peanut butter, 5 teaspoons of chocolate syrup, and 4 cups of crushed ice. He didn't think it tasted right. Describe how the flavor of Kiran's recipe compares to Clare's recipe.
- b. How should Kiran change the quantities that he used so that his smoothie tastes just like Clare's?

he should use

4 tsp chocolate
instead of 5

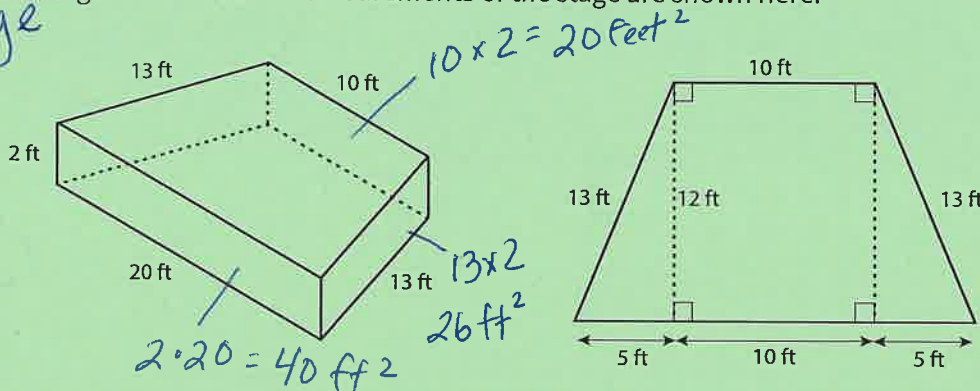
	Clare	Kiran	
Y	1	2	doubled
PB	3	6	doubled
CS	2	5	more than doubled
I	2	4	doubled

see below

1/2

6. A drama club is building a wooden stage in the shape of a trapezoidal prism. The height of the stage is 2 feet. Some measurements of the stage are shown here.

Challenge

BONUS
+2

What is the area of all the faces of the stage, excluding the bottom? Show your reasoning. If you get stuck, consider drawing a net of the prism.

$$\begin{array}{r}
 \text{Top} \quad 10 \times 20 = 200 \text{ ft}^2 \\
 2 \text{ Short Sides} \quad 2(13 \cdot 2) = 52 \text{ ft}^2 \\
 1 \text{ Long Side} \quad 2(20) = 40 \text{ ft}^2 \\
 1 \text{ Medium Side} \quad 2(10) = 20 \text{ ft}^2 \\
 \hline
 292 \text{ ft}^2
 \end{array}$$